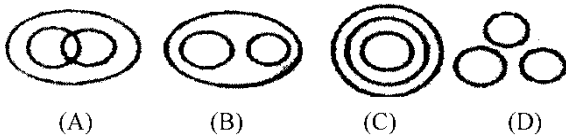


SAMPLE PAPER 3

GENERAL INTELLIGENCE (REASONING)

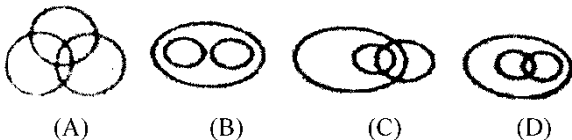
1. Which of the following diagrams indicates the best relation between House, Kitchen, Bedroom:



2. In a certain code "SMART" is written as "TRAMS" and "BIT" as "TIB". How would "WRONG" be written in that code:

- a. NGPWR b. GNPWR
c. GNOWR d. GNPRW

3. In which of the following indicates the best relation between Players, Human beings, Students:



4. If A, P, R, X, S, Z are sitting in a row. S and Z are in the centre. A and P are at the end. R is sitting to the left of A. who is to the right of P:

- a. A b. X
c. S d. Z

5. In a certain code BECAUSE is written BFCBVSF. How would DOORSTEP be written in that code:

- a. DPPRSTEP b. DOROPEST
c. PETS RDOO d. ROODPEST

6. Which one will replace the question mark:

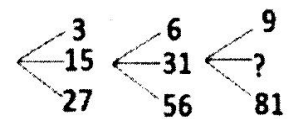
- a. L₁₀
b. I₁₅
c. K₁₅

| | | |
|----------------|----------------|-----------------|
| A ₂ | C ₄ | E ₆ |
| G ₃ | I ₅ | ? |
| M ₅ | O ₉ | Q ₁₄ |

- d. K₈

7. Sachin walks 20 km towards North. He turns left and walks 40 km. He again turn left and walks 20 km. Finally, he moves 20 km after turning to the left. How far is he from his starting position.

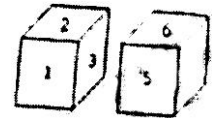
- a. 20 Km
b. 30 Km
c. 50 Km
d. 60 Km



8. Which one will replace the question mark:

- a. 45 b. 41
c. 32 d. 40

9. Which digit will appear on the face with the number 4:

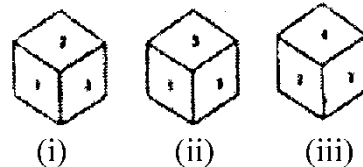


- a. 3 b. 5
c. 6 d. $\frac{2}{3}$

10. The number of boys in a class is three times the number of girls. Which one of the following numbers cannot represent the total number of children in the class?

- a. 48 b. 44
c. 42 d. 40

11. What should be the number opposite to 3?



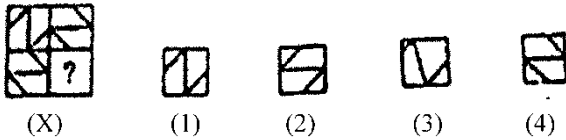
- a. 1 b. 6

AMMISSION HELP LINE NO. 0171-4000403, 9306989629, 9729199040 (AMBALA)
AMMISSION HELP LINE NO. 0176-2515447, 7087907020, 9780775512 (ZIRAKPUR)
AMMISSION HELP LINE NO. 8059460405, 7837148861, 9729526464 (DOSARKA)

c. 5.

d. 4

12.



(X)

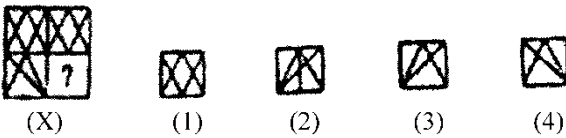
(1)

(2)

(3)

(4)

13.



(X)

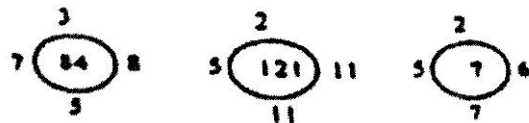
(1)

(2)

(3)

(4)

14.



a. 28

b. 36

c. 48

d. 42

15. Arrange the following word as per order it the dictionary:

(i) QUIET

(ii) QUITE

(iii) QUIT

(iv) QUEST

(v) QUIL

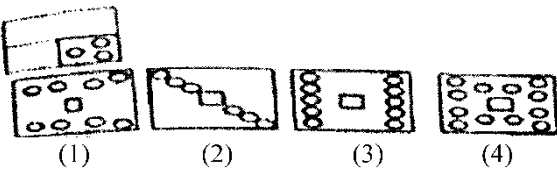
a. iv, i, v, ii, iii

b. iv, i, v, iii, ii

c. iv, v, i, ii, iii

d. iv, v, i, iii, ii

16.



(1)

(2)

(3)

(4)

17. According to a code if "Business are exporting diamonds" is 1, 2, 3, 4 "they are in demand" is 4, 5, 6, 7, "demand dollars for diamonds" is 1, 5, 8, 9 and "Businessmen pay in dollars" is 2, 6, 9, 10. What is code for pay:

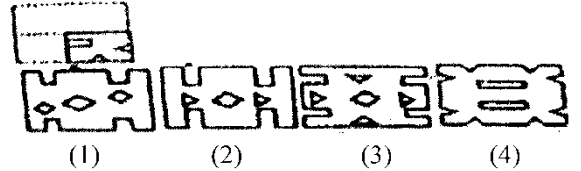
a. 10

b. 9

c. 6

d. 6

18.



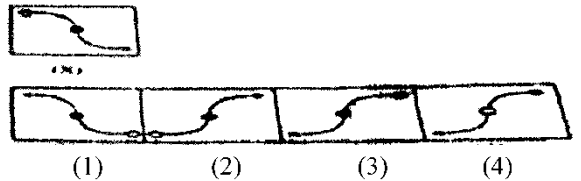
(1)

(2)

(3)

(4)

19.



(1)

(2)

(3)

(4)

20. A cyclist goes straight 7 kms eastwards, then turns right and goes straight 3 kms and goes right again and goes straight 10 kms. In which direction is he from the strating point:

a. South-West

b. North-East

c. North-West

d. South-East

21. Roshan is taller than Hardik who is shorter than Sushil. Niza is taller than Harry but shorter than hardik. Sushil is shorter than Roshan. Who is the tallest:

a. Roshan

b. Sushil

c. Hardik

d. Harry

22. Priti scored more than Rahul. Yamuna scored as much as Divya. Lokita scored less than Manju. Rahul scored more than Yamuna. Manju scored less than Divya. Who scored the least:

a. Manju

b. Yamuna

c. Lokita

d. Rahul

23. Arrange the given dates of birth in descending order:

i. 15.04.1950

ii. 14.05.1960

iii. 14.06.1960

iv. 20.04.1950

v. 25.05.1960

- a. i, v, ii, iii, iv b. i, iv, ii, v, iii
 c. i, iii, ii, iv, v d. i, ii, iv, v, iii

24. In a code language if POSE is coded as OQNPRTFD, then the word TYPE will be coded as:

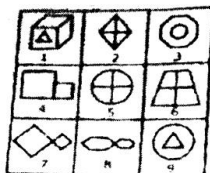
- a. SUXZOQFD b. SUXZQOFD
 c. SUXZOQDF d. SUXZQODE

Direction (25-27): In the following in the correct sequence of occurrence of event:

25. 1. Key 2. Door
 3. Lock 4. Room
 5. Switch on
 a. 5, 1, 2, 4, 3 b. 4, 2, 1, 5, 3
 c. 1, 2, 3, 5, 4 d. 1, 3, 2, 4, 5
26. 1. Study 2. Job
 3. Examination 4. Earth
 5. Apply
 a. 1, 2, 3, 4, 5 b. 1, 5, 3, 2, 4
 c. 1, 3, 5, 4, 2 d. 1, 3, 5, 2, 4
27. 1. Rainbow 2. Rain
 3. Sun 4. Happy
 5. Child
 a. 2, 1, 4, 3, 5 b. 2, 3, 1, 5, 4
 c. 4, 2, 3, 5, 1 d. 4, 5, 1, 2, 3

28. Group the given figures into three classes using each figure only once:

- a. 1, 3, 9: 2, 5, 6: 4, 7, 8
 b. 1, 3, 9: 2, 7, 8: 4, 5, 6
 c. 1, 2, 4: 3, 5, 7: 6, 8, 9
 d. 1, 3, 6: 2, 4, 8: 5, 7, 9




29. A, B, C, D and E are five schools facing towards North. A is in the middle of E and B to the right of D. If C and D are at two ends, which school is on the left side of C:
 a. E b. D

- c. A d. B

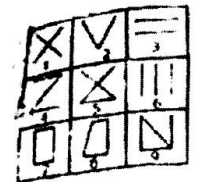
30. Group the given figures into three classes using each figure only once:

- a. 1, 5, 7: 2, 4, 6: 3, 9, 8
 b. 1, 3, 9: 2, 7, 8: 4, 5, 6
 c. 1, 5, 7: 2, 4, 8: 3, 6, 9
 d. 1, 7, 9: 3, 5, 8: 2, 4, 6



31. Group the given figures into three classes using each figure only once:

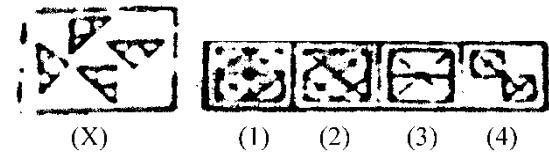
- a. 1, 2, 3: 4, 5, 6: 7, 8, 9
 b. 1, 3, 5: 2, 4, 6: 7, 8, 9
 c. 1, 5, 9: 3, 6, 2: 4, 7, 8
 d. 1, 9, 7: 2, 8: 3, 4, 6



32. How many such 7 are there in the following arrangement, each of which is immediately preceded by 1 and immediately succeeded by 3: 8 3 2 7 1 5 3 7 4 6 1 7 3 7 1 6 7 4 2 1 7 3 5 3 7 1 8

- a. 1 b. 2
 c. 3 d. More than 3

33. Find out which of the figures (1), (2), (3), (4) can be forms from the figure (X).



- a. 1 b. 2
 c. 3 d. 4

34. If 'White' is called 'Blue', 'Blue' is called 'Red', 'Red' is called 'Yellow', 'Yellow' is called 'Green', 'Green' is called 'Black', 'Black' is called 'Violet' and 'Violet' is called 'Orange' then what would be the color of human body

- a. Red b. Yellow
 c. Green d. Violet

35. Find out which of the figures (1), (2), (3), (4) can be forms from the figure (X)

- a. 1 b. 2
 c. 3 d. 4



(X)



(1) (2) (3) (4)

36. Find out which of the figures (1), (2), (3), (4) can be forms from the figure (X).

- a. 1 b. 2
 c. 3 d. 4



(X)

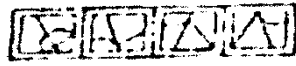


(1) (2) (3) (4)

37. Find out which of the figures (1), (2), (3), (4) can be forms from the figure (X).



(X)



(1) (2) (3) (4)

- a. 1 b. 2
 c. 3 d. 4

Direction (38-40): Which of the following will come in place of the (?) in the given series:

38. RmpL: LpmR:: ?: AcdG
 a. PQRw b. GdcA
 c. GcAd d. GcdA

39. 4: 9:: ?: 25
 a. 16 b. 18
 c. 20 d. 14

40. 5, 13, ?, 109m 325, 973
 a. 39 b. 36
 c. 37 d. 35

41. Find the letters/words which are different from the group:
 a. Yen b. Lira
 c. Dollar d. Ounce


42. Boat: Oar:: Bicycle:?
 a. Road b. Wheel

- c. Seat d. Paddle

43. The day before yesterday was Saturday so tomorrow it will be:
 a. Friday b. Monday
 c. Tuesday d. Wednesday

44. Ashok's mother was 3 times as old Ashok 5 years ago. After 5 years she will be twice as well as Ashok. How old is Ashok today?
 a. 10 years b. 15 years
 c. 25 years d. 20 years

45. Select a suitable figure from the four alternatives

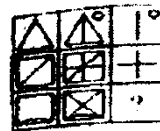


(X)



(1) (2) (3) (4)


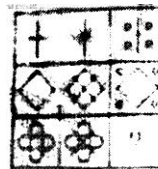
46. Select a suitable figure from the four alternatives that would complete the figure:



(1) (2) (3) (4)

1. 1 b. 2
 c. 3 d. 4

47. Select a suitable figure from the four alternatives that would complete the figure:

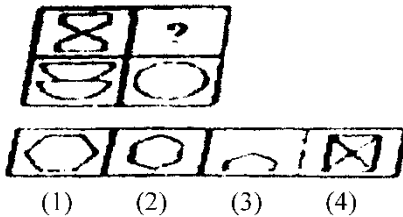


- a. 1 b. 2
 c. 3 d. 4

48. In a row of boys Srinath is 7th from the left and Venkant is 12th from the right. If they interchange their positions. Srinath becomes 22nd from the left. How many boys are there in the row?

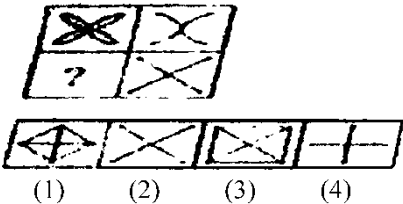
- a. 19. b. 31
c. 33. d. 34

49. Select a suitable figure from the four alternative that would complete the figure



- a. 1 b. 2
c. 3. d. 4

50. Select a suitable figure from the four alternatives that would complete the figure:



- a. 1 b. 2
c. 3 d. 4

MATHEMATICS

51. There are 789 pages in a book. How many pages are there in 14 books?

- a. 11056 b. 11046
c. 11036 d. 11066

52. How many weeks are there in 105 days:

- a. 14 b. 12
c. 13 d. 15

53. There are 4410 toffees in a box. Each student of the school is provided with 14 toffees. How many students are there in the school?

- a. 305 b. 315
c. 325 d. 335

54. Round 550666 to the nearest hundred:

- a. 550700 b. 550600
c. 550000 d. 551000

55. You have finished 122 questions out of 156. How many more questions do you have to work on to finish:

- a. 32 b. 33
c. 34 d. 35

56. I am planting 50 apple trees and 30 peach trees. I want the same number and type of trees per row. What is the maximum number of trees I can plant per row?

- a. 5 b. 10
c. 12 d. 7

57. Sharda has two pieces of cloth. One piece is 72 inches wide and the other piece is 90 inches wide. She wants to cut both pieces into strips of equal width that are as wide as possible. How wide should she cut the strips:

- a. 18 b. 16
c. 14 d. 12

58. Leena has swimming lessons every fifth day and driving lessons every third day. She had swimming lesson on May 5, when will be the next date on which has both swimming and driving lessons:

- a. 15 May b. 10 May
c. 20 May d. 5 May

59. Find the value of the expression in lowest forms: $\frac{1}{5} / \frac{2}{3}$:

- a. $\frac{2}{15}$ b. $\frac{3}{10}$
c. $\frac{1}{5}$ d. $\frac{3}{15}$

60. What will be the interest for 1000 rupees for 2 years at 8% per annum:
 a. Rs. 120 b. Rs. 160
 c. Rs. 140 d. Rs. 100
61. Calculate the ratio $2:3 = 36$:
 a. 45 b. 54
 c. 37 d. 56
62. Mahesh can complete a work in 20 days and the same work Suresh can complete in 5 days. In how many days will they jointly complete the work:
 a. 4 b. 8
 c. 6 d. 5
63. A man bought a watch for Rs. 550. At what price should he sell the watch so as to gain 10% annum.
 a. Rs. 560 b. Rs. 600
 c. Rs. 605 d. Rs. 575
64. A person has purchased $\frac{3}{4}$ of a kg salt from one shop and $\frac{1}{2}$ kg from another shop. Out of total purchase he has used $\frac{2}{3}$ kg. Find how much salt is left with him:
 a. $\frac{1}{3}$ kg b. $\frac{7}{12}$ kg
 c. $\frac{2}{3}$ kg d. $\frac{5}{12}$ kg
65. How many 20 cm long 14 cm wide bricks are needed to pave a rectangular floor 16 m long and 14 m wide:
 a. 8000 b. 11200
 c. 10000 d. 2800
66. A student secured 30% marks out of total marks of 250. If he failed by 25 marks, the marks required to pass are:
 a. 50 b. 75
 c. 100 d. 125
67. Convert $\frac{11}{300}$ in to percentage:
 a. $3\frac{2}{3}\%$ b. $3\frac{1}{3}\%$
 c. 300% d. None
68. Five bells ring at intervals 2, 3, 4, 5, 6 seconds respectively. Find how many times in half an hour they will together:
 a. 60 b. 15
 c. 30 d. 45
69. The sum of the smallest and greatest number formed by the digits 5, 0, 8, 9, 2
 a. 20580 b. 98520
 c. 101109 d. 119109
70. Find the value of the expression: $2.5 / 0.5 \times 0.1 - 0.05$:
 a. 0.45 b. 49.95
 c. 0.25 d. 100
71. Sum of all prime numbers between 10 and 25 is:
 a. 72 b. 83
 c. 66 d. 70
72. Cost of 6 cans of juice is Rs. 210 then the cost of 4 cans of juice (in Rs.):
 a. 40 b. 140
 c. 35 d. 45
73. Find the largest number that will divide 33, 61 and 75 leaving 5 as remainder in each case:
 a. 7 b. 14
 c. 28 d. 56
74. The simplification of $1 + \frac{1}{10} + \frac{1}{100} + \frac{1}{1000}$,

- a. 1.001 b. 1.111
c. 1.001 d. 0.1111
- 75.** How many seconds are there in 5 hours:
a. 18000 b. 18500
c. 1800 d. 20000
- 76.** One side of a square is 3 cm. What is its perimeter:
a. 12 cm b. 10 cm
c. 11 cm d. 13 cm
- 77.** A student secured 30% marks out of total marks of 250. If he failed by 25 marks, the marks required to pass are:
a. 50 b. 75
c. 100 d. 125
- 78.** A train is running at a uniform speed of 75 km/hr. How much time will it take to cover a distance of 350 km:
a. 4hrs. b. 5 hrs.
c. 4 hrs. 30 min d. 4 hrs. 40 min
- 79.** 10 kg of sugar costs 250 rupees, find the cost of 15 kg of sugar:
a. 375 b. 350
c. 275 d. 315
- 80.** Find the supplementary angle of 45° ?
a. 125 b. 135
c. 275 d. 35
- 81.** The sum of two angles of a triangle is 130 degrees, find the third angle of the triangle:
a. 50 b. 65
c. 40 d. 60
- 82.** 0.045 when expressed as percent is:
a. 4.5% b. 5%
c. 0.45% d. 0.045%
- 83.** Find the sum of all natural numbers less than 27 which are divisible by 9?
a. 27 b. 54
- c. 18 d. 36
- 84.** $3.2 + 8.395 - 5.45 =$
a. 6 b. 6.135
c. 6.145 d. 6.125
- 85.** If one dozen notebooks costs 252 rupees, find the cost of 10 notebooks.
a. 210 b. 200
c. 189 d. 168
- 86.** Find the average of all first odd natural numbers less than 15:
a. 6 b. 8
c. 7 d. 10
- 87.** In a school there are 1200 students. If 40% of them are girl, then find the number of boys in the school:
a. 720 b. 480
c. 620 d. 600
- 88.** 30% of a certain sum is 900, find the sum:
a. 6000 b. 2000
c. 3000 d. 4000
- 89.** Karan bought a mobile for 6000 rupees and sold it for 5400 rupees. What is his loss percent?
a. 20% b. 10%
c. 15% d. 30%
- 90.** Find the greatest 4-digit number which is exactly divisible by 66?
a. 9966 b. 6666
c. 9933 d. 9000
- 91.** Find the square root of 2
a. 1.414 b. 1.732
c. 2.23 d. 2.44
- 92.** Find the value: $\frac{0.001}{0.01}$:

- a. 0.01 b. 0.001
c. 0.011 d. 0.1
- 93.** Find the value $0.01 + 0.02 + 0.003$
a. 13.3 b. 1.23
c. 1.33 d. 0.133
- 94.** Find the value $0.1 * 0.01 - 0.01 \times 0.001$:
a. 0.0099 b. 0.00199
c. 0.00001 d. None
- 95.** The perimeter of a rectangular is 280 m and the ratio between lengths to the breadth is 5:2. Find the area of rectangle:
a. 8000 sq. m b. 2800 sq. m
c. 3000 sq. m d. 4000 sq. m
- 96.** $\frac{2}{4}$ divides by $\frac{3}{4}$
a. 0.664 b. 6.666
c. 0.665 d. 0.666
- 97.** Find the value $7789 \times 48 + 7789 \times 52$
a. 19846372 b. 407524
c. 778900 d. None
- 98.** Find the place value of 7 in 874213:
a. 70000 b. 10000
c. 7 d. 74213
- 99.** Rs. 55 = ____ paise
a. 5150 b. 5050
c. 5500 d. 5005
- 100.** 180° angle is called:
a. Straight angle b. Actual angle
c. Right angle d. Obtuse angle

LANGUAGE TEST (ENGLISH)

In the following five questions, four choices have been given for each question. In this one choice has an error. Choose the correct answer and mark it in your answer sheet. If there is no mistake, then mark D as your answer.

- 101.** a. The customer handed over
b. a hundred rupees note
c. to the shopkeeper
d. No error
- 102.** a. If you listen with
b. the question carefully
c. you will be able to answer them, easily
d. No error
- 103.** a. It is the newspaper
b. that exposes us to the widest range
c. of human experiences and behavior
d. No error
- 104.** a. A small body breathes about
b. 45 times per minute while
c. a child of about six years breathes about 25 times every minute.
d. No error
- 105.** a. He fell from a running train
b. and would have died
c. if he was not admitted in the nearby hospital
d. No error
- Direction (106–109):** Questions are related to use of adverbs. Each question has four choices. Make correct choice.
- 106.** a. The Baby is sleeping still
b. The Baby still is sleeping
c. The Baby is still sleeping
d. Still the baby is sleeping
- 107.** a. He spoke well English
b. He spoke English well
c. Well he spoke English
d. He well spoke English
- 108.** a. She is enough intelligent to pass the exam.
b. She enough is intelligent to pass the exam.

- c. She is intelligent enough to pass the exam.
 d. She is intelligent to pass the exam enough

- 109.** a. You should be punctual always
 b. You always should be punctual
 c. You should always punctual
 d. Always you should be punctual

The next four questions are related to use of adjectives. Each question has four options. Make the correct answer and fill the OMR sheet accordingly

- 110.** Ajay is ___ Amit.
 a. taller than b. as tall
 c. the tallest d. None
- 111.** Late night television shows are not always suitable___
 a. of children b. with children
 c. children d. for children
- 112.** I made a painting yesterday. It was good but not ___ as yours.
 a. as good b. good
 c. better d. best
- 113.** My younger sister can't get up in the morning, but at night she is as ___ as daisy
 a. fresh like a b. fresh
 c. freshly d. fresh as a

Pick the correct word from the given words to fill in the blanks to make the complete sentence meaningful.

- 114.** Hardly had he arrived ___ is started raining.
 a. before b. when
 c. than d. after
- 115.** Farida sings very well and ___ does Salim
 a. even b. to
 c. also d. so
- 116.** The new education policy provides a useful___ for the planners to remove illiteracy

- a. breakup b. breakthrough
 c. break in d. breakaway

- 117.** More than 45% of India's population lives ___ the poverty line

- a. under b. beneath
 c. beside d. below

- 118.** The firemen were able to ___ the fire in Church street.

- a. put off b. put out
 c. put away d. off

- 119.** The statement ___ shocked everyone

- a. he died suddenly
 b. he dies suddenly
 c. that he died suddenly
 d. he is dying suddenly

- 120.** She ___ from the crowd because of her height and flaming red hair

- a. stood out b. stood off
 c. stood up d. stood by

- 121.** This website has helped me a lot to ___ with the latest scientific updates

- a. keep up b. keep on
 c. keep out d. keep for

In each question given below, an incomplete statement is given, followed by choices for correctly completing the sentence. Pick out the best one which can complete the sentence meaningfully

- 122.** The employer appeared to be in such good mood that Robin ___

- a. decided to ask for a raise in his salary
 b. was scared to talk to him about his leave
 c. felt very guilty for his inadvertent slip
 d. promised him that he would not slip up again

- 123.** Despite his best efforts to conceal his anger ___

- a. we could understand that he was very happy
- b. he failed to give us an idea of his pain
- c. he succeeded in camouflaging his emotions
- d. people came to know that he was annoyed

124. His appearance is unsmiling but ____

- a. his heart is full of love for others
- b. he looks very serious on most occasions
- c. people are afraid of him
- d. he is uncompromising on matters of tasks performance

125. Owing to acute power shortage, the people our locality have decided to

- a. use more electricity for illumination
- b. off-switch the electrical appliance while not in use
- c. explore other avenues for utilizing the excess power
- d. use of electricity only when it is required

Some proverbs/idioms are given below with their meanings. Choose the correct meaning of idiom.

126. To cry wolf

- a. To listen eagerly
- b. To give false alarm
- c. to turn pale
- d. To keep off starvation

127. A man of Straw

- a. An unreasonable person
- b. A very active person
- c. A worthy fellow
- d. A weak man

128. To bend one's back

- a. To take up agricultural farming
- b. to take a difficult task

- c. To get entangled into unnecessary things
- d. Take interest in technical work

129. To pick holes

- a. To find some reason to quarrel
- b. To destroy something
- c. To criticize someone
- d. To cut some part of the item

The next four questions have jumbles words. Put them in a sequence to form a meaningful sentence.

130. could / accident / few / unhurt / from / escape / the / fire

- a. Few could escape unhurt from the fire accident
- b. From the fire accident few could escape unhurt
- c. The fire accident few could escape unhurt from
- d. Unhurt escape could few from fire accident

131. many / anyone / I / were / there / but / not / know / did

- a. I did not know anyone but many were there
- b. But there were many I did not know anyone
- c. Many were there but I did not known anyone
- d. But I did not know anyone many were there

132. listen / what / to / parents / your / say

- a. What you parents say listen to
- b. Your parents say listen to what
- c. Say what your parents listen to
- d. Listen to what your parents say

133. horse / has / the / hurt / itself

- a. Horse has hurt the itself
- b. Itself has the horse hurt

- c. The horse has hurt itself
- d. Hurt itself has the horse

In the following questions, choose the word which best expresses the meaning of the given word.

134. KINDLE

- a. to ignite
- b. desire
- c. old person
- d. creditable

135. IMINENT

- a. impure
- b. upcoming
- c. unsteady
- d. proud

136. DISCARD

- a. reject
- b. fact
- c. perfect
- d. hostile

137. HALLOWED

- a. old
- b. sacred
- c. effective
- d. inactive

In the following questions, find the correctly spelt words.

- 138.** a. Vaccination b. Vacination
 c. Vaecination d. Vaccenation

- 139.** a. Velnerable b. Vulnarable
 c. Vulnerable d. Valnerable

- 140.** a. Pneumonia b. Phneumonia
 c. Nemonia d. Neumonia

- 141.** a. Ommineous b. Omineous
 c. Ominous d. Omenous

- 142.** a. Vetarinary b. Vetenary
 c. Vetinary d. Veterinary

In the following questions, chose the word which is exact OPPOSITE of the given words.

143. FOREMOST

- a. unimportant
- b. hindmost
- c. disposed
- d. mature

144. PERENNIAL

- a. Frequent
- b. Regular
- c. Lasting
- d. Rare

145. PROTECTS

- a. defends
- b. deprives
- c. deserts
- d. secures

146. MODERN

- a. ancient
- b. recent
- c. cast
- d. latest

Read the following poem carefully and answer the following questions by choosing most appropriate option.

SYMPATHY

I lay in sorrow in deep distress. My grief a proud man beard. His looks were cold, he gave me money. But not a kindly word. My sorrow passed- I paid him back. The money he gave to me. Then stood erect and spoke my thanks and blessed his charity. I lay in want and grief and pain. A poor man passed my way. He bound my head, he gave me bread. He watched me night and day. How shall I pay him back again, for all he did to me? Oh, gold is great but greater far is heavenly sympathy.

147. Which of the following statements is not true?

- a. The poet repaid his debt to the proud man by thanking him
- b. The poor man blessed the charity of the poet
- c. When the poet was in sorrow he was given money
- d. the poet says he cannot repay the poor man for his sympathy

148. How did the proud man help the poet when he was in deep distress?

- a. He gave him jewels
- b. He took him home
- c. He gave some money
- d. He pitied the poet

149. Which word in the poem means "giving money to a person who is in need"?

- a. charity b. sympathy
c. kindness d. distress

- 150.** How did the poor man take care of the poet?
a. The poor man gave him some money and food
b. The poor man gave gold and kind words
c. The poor man gave food to the poet and took care of him day and night
d. He took the poet and bound his head which was hurt.

GENERAL KNOWLEDGE

- 151.** The government of India has launched which scheme for online release of new LPG connections?
a. Sulabh b. Saral
c. Muskaan d. Sahaj
- 152.** Which Asian county has conferred with associate membership status by European?
a. Pakistan b. China
c. India d. Japan
- 153.** Which African city will host 2022 Commonwealth games?
a. Pretoria b. Kimberley
c. Johannesburg d. Durban
- 154.** Which state government of India launched One Stop Centre "Sakhi" to help women in distress?
a. Chhattisgarh b. Haryana
c. Uttar Pradesh d. Madhya Pradesh
- 155.** The famous Sun temple at Konark was built by
a. Prataparudra b. Anantaraman
c. Narshima-I d. Harshvardhan
- 156.** Recently discovered asteroid 316201 is named in honor of which personality?
a. Prof. CN Rao
b. Malala Yousufzai
- c. Sachin Tendulkar
d. Dr. APJ Abdul Kalam
- 157.** Who was the first recipient of Rajiv Gandhi Khel Ratna award?
a. Saina Nehwal b. Sachin Tendulkar
c. Leander Paes
d. Vishwanathan Anand
- 158.** Who was appointed as the chairman of India's Oscar Jury?
a. Mira Nair b. Shekhar Kapoor
c. Amol Pelekar d. Mani Ratnam
- 159.** Which of the following pairs is correctly matched?
a. Vitamin E-Reproduction
b. Vitamin B-Rickets
c. Vitamin C - Night Blindness
d. Vitamin A- Scurvy
- 160.** Which of the following bank changed its name to Axis Bank Ltd
a. Yes Bank b. Centurian Bank
c. Corporation Bank d. UTI Bank
- 161.** Who was declared Emerging player of the season in IPL 8?
a. Naman Ojha b. Unmukt Chand
c. Shreyas Iyer d. Sanju Samson
- 162.** Who is the author of the famous book "To kill A Mockingbird"/
a. Harper Lee b. Stan Lee
c. Jet Lee d. JR Tolling
- 163.** Which of the following sets of gases contribute to global warming?
a. Sulphur Dioxide, Nitrogen, Carbon Dioxide and Ozone
b. Oxygen, Methane, Carbon dioxide and Ozone
c. CFE, Oxygen, Nitrogen and Carbon Dioxide

- d. Methane, Carbon Dioxide, nitrous oxide and water vapor
- 164.** What is the minimum require hemoglobin in human?
- a. 12 gm/dl b. 8.5 gm/dl
c. 16 gm/dl d. 11 gm/dl
- 165.** Which of the following features does the Polar bear have to withstand the cold in Polar conditions?
- a. Webbed feet b. Hollow bones
c. Thick fur d. Paddle-like Limbs
- 166.** What are the adaptations for flight in birds
- (i) Hollow bones to reduce body mass
(ii) Feathers covering their body
(iii) A streamlined body with powerful tail
(iv) Wings with powerful muscles
- a. (i) only b. (i), (ii) and (iv)
c. (i), (ii) and (iii) d. (i), (iii) and (iv)
- 167.** The royal court of Allaudin Khilji was graced by the great poet
- a. Firdausi b. Amir Khusro
c. Omar Khaiyyam d. Ibn Batuta
- 168.** Who became the first Indian to win Ladies British amateur stroke play Gold Championship 2015?
- a. Aditi Ashok b. Aditi Bhandari
c. Aditi Jain d. Aditi Kumari
- 169.** Which women's safety app has been launched by Indian railway?
- a. ROSahayak b. R-Jagruk
c. R-mitra d. R-Sahyog
- 170.** With which Telecom Company, taxi aggregator Uber cabs has tied up to set up Wi-Fi?
- a. Vodafone b. Airtel
c. MTNL d. BSNL
- 171.** What does NCRB stands for ___ ?
- a. National Complaint Records Bureau
b. National cricket Records Bureau
c. National Control Records bureau
d. National Crime Records Bureau
- 172.** Which of the following banks launched Smart Vault digital locker facility?
- a. SBI b. Yes Bank
c. ICICI d. PNB
- 173.** Who was the first Chief of Army Staff of the Indian Army?
- a. Field marshal KM Cariappa
b. Gen PS Bhagat
c. Gen Rajendra Singh
d. Field Marshal SHFJ Manekshaw
- 174.** Which of the following airports is world's first solar run airport?
- a. Jay Prakash Narayan International Airport
b. Cochin International Airport
c. Chhatrapati Shivaji International Airport
d. Indira Gandhi International Airport
- 175.** Who became first Indian woman shuttler to win bronze medal in World Badminton Championship?
- a. PV Sindhu b. Jawala Gutta
c. Saina Nehwal d. Ashwani Ponappa
- 176.** Which of things listed below are biodegradable?
- (i) Log (ii) Plastic Toys
(iii) Gold Necklace (iv) Roasted Chicken
(v) Credit Card (vi) Apple
- a. (i) and (ii) b. (iii), (iv) and (v)
c. (iii) and (iv) d. (i), (iv) and (vi)
- 177.** What happens to the water table of a place having droughts for a long period of time?

- a. It gets higher because of continuous evaporation and flow
 b. It gets lower because of continuous evaporation and flow
 c. It remains the same because soli protects it from the heat
 d. It gets replenished continuously.
- 178.** Select the incorrect match the following
 a. Venus- called morning or evening star
 b. Saturn - its ring is made of ice, rocks and dust
 c. Jupiter - largest and fastest spinning planet
 d. Mercury - hottest planet
- 179.** Identify the incorrect statement from the of following?
 a. Matter exists in three forms
 b. Matter can be changed from one form to another
 c. A new substance is formed in a chemical change
 d. Ice is heavier than water
- 180.** The gas usually filled in electric bulb is
 a. Nitrogen b. Hydrogen
 c. Carbon Dioxide d. Oxygen
- 181.** The inert gas which is used by deep sea divers for breathing?
 a. Argon b. Xenon
 c. Helium d. Krypton
- 182.** Which of the following body parts in human is the longest?
 a. Large intestine b. Small intestine
 c. Femur Bone d. Lungs
- 183.** Brass gets discolored in air because of which of the following gases in air?
 a. Oxygen
 b. Hydrogen Sulphide
 c. Carbon Dioxide
 d. Nitrogen
- 184.** Which of the following non-metal that remains liquid at room temperature?
 a. Phosphorus b. Bromine
 c. Chlorine d. Helium
- 185.** Who is famously known as 'Madiba'?
 a. Martin Luther King
 b. Nelson Mandela
 c. Aung San Suu Kyi
 d. Dalai Lama
- 186.** Who established Abhinav Bharat?
 a. Vir Savarkar and Ganesh Savarkar
 b. Lala Hardyal
 c. Ram Prasad Bismil
 d. Chander Shekhar Azad
- 187.** Which Article of the Indian Constitution deals with untouchability?
 a. Article 13 b. Article 15
 c. Article 17 d. Article 19
- 188.** Dulhashti Power Project (J & K) is located on river
 a. Rivi b. Sutlej
 c. Chenab d. Jhelum
- 189.** Total number of longitudes are
 a. 90 b. 180
 c. 270 d. 370
- 190.** Which day is celebrated as International Yoga Day?
 a. 19 May b. 21 June
 c. 27 May d. 29 June
- 191.** Tenth schedule added in the constitution by 52nd Amendment Act of 1985 deals with
 a. Panchayati Raj
 b. Official Languages
 c. Anti-defection Law

- d. Reduction in voting age from 12 to 18 years
- 192.** In SCUBA diving, SCUBA stands for?
- Self-Contained Under Water Breathing Apparatus
 - Self-Contaminated Under Water Breathing Apparatus
 - Self-Controlled Under Water Breathing Apparatus
 - Self-Converged Under Water Breathing Apparatus
- 193.** Who among the following is associated with Wiki Leaks?
- Edward Snowden
 - Mark Zuckerberg
 - Steve Jobs
 - Julian Assange
- 194.** Nico Anastasiades, who was on an official visit to India in April-2017, is the president of
- Cyprus
 - Belgium
 - Austria
 - Sweden
- 195.** India's first under water metro will be constructed in which city?
- Delhi
 - Kolkata
 - Kochi
 - Chennai
- 196.** India's largest fresh water aquarium has recently opened in:
- Bhubaneshwar
 - Ranchi
 - Jaipur
 - Pune
- 197.** Which among the following became the first city in the world to get its own Microsoft designed font?
- Paris
 - London
 - Berlin
 - Dubai
- 198.** Who among the following has been elected as the new Prime Minister of Pakistan.
- Bilawal Sharif
 - Shahbaz Zardari
 - Meriyam Bhutto
 - Shahid Khaqan Abbasi
- 199.** On August 2, 2017, Reserve Bank of India (RBI) cut the repo rate by 25 basis points. Now the rep rate stands at:
- 6.00%
 - 6.25%
 - 6.50%
 - 7.00%
- 200.** Who among the following formed heavyweight world champion has retired from boxing?
- Joseph Parker
 - Anthony Joshua
 - Wladimir Klitschko
 - Tyson Fury

AMMISSION HELP LINE NO. 0171-4000403, 9306989629, 9729199040 (AMBALA)
AMMISSION HELP LINE NO. 0176-2515447, 7087907020, 9780775512 (ZIRAKPUR)
AMMISSION HELP LINE NO. 8059460405, 7837148861, 9729526464 (DOSARKA)

ANSWER KEY

| <u>General Intelligence (Reasoning)</u> | | | | | | | | | |
|--|--------|--------|--------|--------|--------|--------|--------|--------|--------|
| 1. B | 6. D | 11.B | 16.D | 21. A | 26. B | 31. A | 36. D | 41. D | 46. C |
| 2. D | 7. A | 12. A | 17. A | 22. C | 27. B | 32. B | 37. B | 42. D | 47. B |
| 3. D | 8. A | 13. C | 18. D | 23. B | 28. A | 33. B | 38. B | 43. C | 48. C |
| 4. B | 9. A | 14. D | 19. C | 24. C | 29. B | 34. B | 39. C | 44. B | 49. D |
| 5. A | 10. C | 15. B | 20. A | 25. D | 30. B | 35. A | 40. C | 45. D | 50. D |
| <u>Mathematics</u> | | | | | | | | | |
| 51. B | 56.B | 61. B | 66. B | 71. C | 76. C | 81. B | 86. A | 91. A | 96. A |
| 52. D | 57. A | 62. A | 67. D | 72. B | 77. C | 82. D | 87. B | 92. D | 97. B |
| 53. B | 58. C | 63. C | 68. B | 73. A | 78. B | 83. D | 88. B | 93. D | 98. A |
| 54. A | 59. B | 64. B | 69. A | 74. C | 79. D | 84. B | 89. C | 94. D | 99. A |
| 55. C | 60. B | 65. B | 70. A | 75. B | 80. C | 85. B | 90. B | 95. B | 100. A |
| <u>Language Test (English)</u> | | | | | | | | | |
| 101. B | 106. C | 111. D | 116. B | 121. A | 126. B | 131. C | 136. A | 141. A | 146. A |
| 102. A | 107. B | 112. A | 117. A | 122. A | 127. D | 132. D | 137. B | 142. D | 147. D |
| 103. D | 108. A | 113. B | 118. A | 123. D | 128. B | 133. D | 138. A | 143. A | 148. C |
| 104. A | 109. C | 114. B | 119. C | 124. A | 129. B | 134. A | 139. C | 144. C | 149. A |
| 105. C | 110. A | 115. D | 120. A | 125. D | 130. B | 135. C | 140. A | 145. B | 150. B |
| <u>General Knowledge</u> | | | | | | | | | |
| 151. D | 156. B | 161. C | 166. D | 171. D | 176. D | 181. C | 186. A | 191. C | 196. B |
| 152. A | 157. D | 162. A | 167. B | 172. C | 177. B | 182. B | 187. C | 192. A | 197. D |
| 153. D | 158. C | 163. B | 168. A | 173. A | 178. D | 183. B | 188. C | 193. D | 198. D |
| 154. B | 159. C | 164. A | 169. C | 174. B | 179. D | 184. B | 189. D | 194. A | 199. A |
| 155. C | 160. D | 165. C | 170. B | 175. A | 180. A | 185. B | 190. B | 195. B | 200. C |

AMMISSION HELP LINE NO. 0171-4000403, 9306989629, 9729199040 (AMBALA)
 AMMISSION HELP LINE NO. 0176-2515447, 7087907020, 9780775512 (ZIRAKPUR)
 AMMISSION HELP LINE NO. 8059460405, 7837148861, 9729526464 (DOSARKA)