

CAREER INFOWIS INSTITUTE

SAINIK SCHOOL, MILITARY SCHOOL, RIMC, NAVODAYA SCHOOL

SAMPLE PAPER 2

LANGUAGE TEST (ENGLISH)

I. Choose the correct spelling:

1. a. Aceelerate b. Acelerate
c. Accelerate d. Accellrate
2. a. Xampaegn b. Cammpaign
c. Caampaign d. Campaign
3. a. Nucery b. Nursery
c. Nersury d. nurcery
4. a. Committee b. Comettee
c. Committe d. Committe
5. a. Descendant b. Descendente
c. Discident d. Descideint

II. Read the poem given below and then answer the question which fellow:

Letter from a parent

Dear Sir,

I feel I ought to write About Tom's essay work last night of all the subjects you have set this seemed the most unwise yet.

"Describe your family..." Tom wrote it, so well, I just had to stop it. Being handed in - so did my wife. The details of our family life Are not such kinds, alas, That I should want them read in class: We did not wish the High School staff to read them for a lunch-hour-laugh. We tore it out. I realize You may think what we did unwise, but give it your consideration. And please accept my explanation. I trust you will not blame my son, For, after all, the work was done.

Yours truly

Harold Honey bun

6. The letter is written by a father to:
a. His employer b. His friend
c. His son's teacher d. His son
 7. The son was given the task of:
a. Writing an essay
b. Composing a poem
c. Doing math sums
d. Writing a letter
 8. The father stopped his son from submitting the task because:
a. it was badly written
b. it was too funny to be read in class
c. it contained too many details
d. It was not a good task
 9. The father thought that submitting the task would cause:
a. The school staff to laugh
b. The teacher to get angry
c. The head master to scold his son
d. His son to cry
 10. The father thought that his son should be pardoned because
a. He was small
b. He completed the task given
c. It was he who stopped his from completing it
d. It was his wife who tore out the page
- #### **III. Give one word for the following sentence**
11. A person living permanently at a certain place is known as
a. Native b. Resident
c. Domicile d. Subject

AMMISSION HELP LINE NO. 0171-4000403, 9306989629, 9729199040 (AMBALA)
AMMISSION HELP LINE NO. 0176-2515447, 7087907020, 9780775512 (ZIRAKPUR)
AMMISSION HELP LINE NO. 8059460405, 7837148861, 9729526464 (DOSARKA)

CAREER INFOWIS INSTITUTE

SAINIK SCHOOL, MILITARY SCHOOL, RIMC, NAVODAYA SCHOOL

- | | |
|--|---|
| <p>12. One who goes on a journey to a holy place:</p> <p>a. Pilgrim b. Genius
 c. Traveler d. Visitor</p> <p>13. A person who believes that there is no god:</p> <p>a. Hermit b. Theist
 c. traitor d. Atheist</p> <p>14. Expression of a sympathy especially on the occasion of death of a person:</p> <p>a. Exuberance b. Condolence
 c. Gratitude d. Remorse</p> <p>15. Policy of forcefully extending a nation's authority by territorial gain:</p> <p>a. Imperialism b. Chauvinism
 c. Plagiarism d. Nationalism</p> <p>IV. Fill in the blanks with appropriate word:</p> <p>16. I think I ___ a new calculator.</p> <p>a. Needs b. Needed
 c. Need d. Am needing</p> <p>17. It ___ many times every winter in Shimla.</p> <p>a. Snowed b. Snows
 c. Is snowing d. Is snow</p> <p>18. The student is ___ papers.</p> <p>a. Writing b. Writes
 c. Write d. Is wrote</p> <p>19. I've been waiting for ___ long time.</p> <p>a. No article b. A
 c. The d. An</p> <p>20. It ___ have been a nice outing if he was not there.</p> <p>a. May b. Could
 c. Will d. Should</p> <p>21. Sanjay and Sanjana's father ___ a business man.</p> <p>a. Are b. Have
 c. Is d. Has</p> | <p>22. Mrs. Verma's and Mrs. Sharma's houses ___ in the same building.</p> <p>a. Is b. Are
 c. Has d. Have</p> <p>23. As you sow, so ___ you reap.</p> <p>a. Shall b. Will
 c. Would d. Must</p> <p>24. There is ___ milk in the cup than in the other.</p> <p>a. Few b. Fever
 c. Less d. Little</p> <p>25. A ___ of singers was singing in the congregation.</p> <p>a. Torque b. Gang
 c. Choir d. Posse</p> <p>V. Identify the correct kind of sentence:</p> <p>26. Please help me</p> <p>a. Assertive b. Interrogative
 c. Exclamatory d. Negative</p> <p>27. Hurray! We have won the match.</p> <p>a. Affirmative b. Exclamatory
 c. Interrogative d. Negative</p> <p>28. How is your mother?</p> <p>a. Negative b. Affirmative
 c. Interrogative d. Exclamatory</p> <p>29. He is not a good student.</p> <p>a. Affirmative b. Exclamatory
 c. Interrogative d. Negative</p> <p>30. Does he not sing a song?</p> <p>a. Negative b. Affirmative
 c. Interrogative d. Interrogative
 Negative</p> <p>VI. Mark the opposite word of the following:</p> <p>31. In all places and at all times, there is Profusion of talents.</p> <p>a. Plenty b. Generosity</p> |
|--|---|

AMMISSION HELP LINE NO. 0171-4000403, 9306989629, 9729199040 (AMBALA)
AMMISSION HELP LINE NO. 0176-2515447, 7087907020, 9780775512 (ZIRAKPUR)
AMMISSION HELP LINE NO. 8059460405, 7837148861, 9729526464 (DOSARKA)

CAREER INFOWIS INSTITUTE

SAINIK SCHOOL, MILITARY SCHOOL, RIMC, NAVODAYA SCHOOL

- c. Aversion d. Scarcity
- 32.** The actor is well known both for his **Humility** and courage.
- a. Gentleness b. Honesty
c. Determination d. Pride
- 33.** Ashish has an **innate** sense of humor.
- a. Natural b. Inborn
c. Unusual d. Acquired
- 34.** Rajesh's **rustic** behavior astonished the teacher.
- a. Impolite b. Genuine
c. Sophisticated d. Awkward
- 35.** Always be **impartial** in your dealings.
- a. Discourteous b. Impudent
c. Disrespectful ed. Unfair

VII. Complete the following passage by choosing the correct option from those given in brackets:

Do you have a best friend? Surely I have. Here name is Sangita. **36** was my schoolmate. She was **37** first girl of our class. If i were to **38** how she looks, **39** would say she is pretty, witty and full of life. Since our interest lies in the same hobbies, we spend a lot of time together. **40** is Avery good dancer too. She won many prizes when we were in school.

- 36.** a. Here b. She
 c. Its d. Their
- 37.** a. A b. An
 c. The d. Firstly
- 38.** a. Is tell b. Tell
 c. Told d. Telling
- 39.** a. We b. I
 c. Myself d. Mine
- 40.** a. I b. You

- c. Romi d. Sangita

VIII. Rearrange the following in a sequence to form a meaningful sentence.

- 41.** Taken / to/ the/ hospital / were / the / injured
- a. To the hospital were injured the taken
b. The injured taken to the hospital were
c. The injured were taken to the hospital
d. To the hospital were taken the injured
- 42.** An / email / ? / Who / wrote
- a. An email wrote who?
b. Who wrote an email?
c. Who an email wrote?
d. Wrote who an email?
- 43.** Meeting / king / after / departed / the / he.
- a. The king Departed after meeting he
b. Departed after he meeting the king
c. He departed after meeting the king
d. After meeting he, the king departed

IX. Choose the word/ phrase which best express the meaning of the given words:

- 44.** Banish
- a. Order someone to leave a place
b. Beat or hurt someone
c. Untidily dressed
d. Public statement in church
- 45.** Native
- a. Relative b. Negative
c. National d. Inhabitant
- 46.** Abandon
- a. Discard b. Delicate
c. Bandaged d. Deny
- 47.** Contemporary
- a. Ancient b. Original
c. Old d. Modern
- 48.** Calamity

AMMISSION HELP LINE NO. 0171-4000403, 9306989629, 9729199040 (AMBALA)
AMMISSION HELP LINE NO. 0176-2515447, 7087907020, 9780775512 (ZIRAKPUR)
AMMISSION HELP LINE NO. 8059460405, 7837148861, 9729526464 (DOSARKA)

CAREER INFOWIS INSTITUTE

SAINIK SCHOOL, MILITARY SCHOOL, RIMC, NAVODAYA SCHOOL

- a. Celebration b. Disaster
c. Disorder d. Centaury
- 49.** Artifact:
a. Object made by human
b. Not original
c. Type of spacecraft
d. None of these
- 50.** Elevate
a. Raise b. Evaluation
c. Low d. Evaluate
- GENERAL KNOWLEDGE**
- 51.** Which animal never stops growing:
a. Giraffe b. Snake
c. Crocodile d. Blue whale
- 52.** Kelvin is a unit related to
a. Speed b. Density
c. Temperature d. Humidity
- 53.** What is Origami:
a. Art of paper folding
b. National Anthem
c. An insect
d. Plant
- 54.** In which city did the first metro railway system begin:
a. Delhi b. Mumbai
c. Kilkata d. Chennai
- 55.** Who is known as the father of Homeopathy:
a. Aristotle b. Hahnemann
c. Hippocrates d. Kent
- 56.** Which state does "Tanjore Painting" belong to:
a. Karnataka b. Tamil Nadu
c. Andhra Pradesh d. Kerala
- 57.** Kimono is the traditional dress of which country:
a. China b. Australia
c. Japan d. England
- 58.** Where is St. Peter Church located:
a. Mexico b. Washington DC
c. Vatican d. London
- 59.** Who wrote 'Glimpse of world history':
a. Dr. S Radhakrishnan
b. Jawaharlal Nehru
c. Kuldip Nayar
d. Bertrand Russell
- 60.** In which year did Indian Postal service start in India:
a. 1774 b. 1837
c. 1222 d. 1786
- 61.** Who was the first president of the Indian National Congress:
a. Annie Besant b. Bipin Chandra Pal
c. WC Bonerjee
d. Subash Chandra Bose
- 62.** How many rocks were used for carving the sphinx in Egypt:
a. 14 b. 20
c. 1 d. 5
- 63.** Who won the first 'Padmashree' in Athletics:
a. P T Usha b. Milkha Singh
c. Bandhu Singh d. Sakshi
- 64.** When were the first Commonwealth Games held:
a. 1920 b. 1890
c. 1930 d. 1934
- 65.** World Health day is celebrated on which day.

AMMISSION HELP LINE NO. 0171-4000403, 9306989629, 9729199040 (AMBALA)
AMMISSION HELP LINE NO. 0176-2515447, 7087907020, 9780775512 (ZIRAKPUR)
AMMISSION HELP LINE NO. 8059460405, 7837148861, 9729526464 (DOSARKA)

CAREER INFOWIS INSTITUTE

SAINIK SCHOOL, MILITARY SCHOOL, RIMC, NAVODAYA SCHOOL

- a. 05 June b. 07 April
 c. 07 June d. 11 July
- 66.** Name the tallest man made structure of the world
 a. Taipei 101 b. Burj Khalifa
 c. C N Tower d. Eiffel Tower
- 67.** Which of the following is not a fruit in reality?
 a. Pineapple b. Orange
 c. Strawberry d. Banana
- 68.** Who won the Arjuna award 2016 for cricket:
 a. Virat Kohli b. Ajainkya Rahane
 c. Rohit Sharma d. Dhoni
- 69.** What is the min. age to contest the Assembly Election:
 a. 25 b. 21
 c. 18 d. 24
- 70.** Whose slogan was 'Jai Jawan, jai Kishan':
 a. Lal Bahadur Shastri
 b. Indira Gandhi
 c. Morarji Desai d. Rajiv Ghandhi
- 71.** At which continent are 'Maitri' and 'Dakshin Gangotri'?
 a. Australia b. Africa
 c. Antarctica d. Europe
- 72.** Which part of the brain that controls our emotions like fear, sorrow and happiness":
 a. Cerebrum
 b. Cerebellum
 c. medulla Oblongata
 d. Pons
- 73.** In which state is the Netravali wildlife sanctuary is located
 a. Goa b. Kerala
- c. Mizoram d. Orissa
- 74.** In which of the following states is English the official language:
 a. Orissa b. Nagaland
 c. Kerala d. Tripura
- 75.** Who is the minister of Railways of our country:
 a. Parkash Singh Badal
 b. Piyush Goel
 c. Tarun Gogol
 d. Mukul Sangma
- 76.** The Thaipooasam festival is celebrated by which one of the following religions:
 a. Christians b. Muslims
 c. Hindu d. Sikhs
- 77.** Hero India Open tournament is related to which among the following sports:
 a. Cricket b. Hockey
 c. Golf d. Football
- 78.** Pandit Shiv Kumar Sharma is associated with the instrument:
 a. Sarangi b. Santoor
 c. Sitar d. Mohan Veena
- 79.** What is the ratio of the width to the length of the National Flag of India?
 a. 2: 4 b. 3: 5
 c. 4: 5 d. 2: 3
- 80.** Who was the longest serving President of India:
 a. APJ Abdul Kalam b. Zakir Hussain
 c. Rajendra Prasad d. Giani Zail Singh
- 81.** Which of the following is used as a moderator in nuclear reactor:
 a. Thorium b. Graphite
 c. Radium d. Proton

AMMISSION HELP LINE NO. 0171-4000403, 9306989629, 9729199040 (AMBALA)
 AMMISSION HELP LINE NO. 0176-2515447, 7087907020, 9780775512 (ZIRAKPUR)
 AMMISSION HELP LINE NO. 8059460405, 7837148861, 9729526464 (DOSARKA)

CAREER INFOWIS INSTITUTE

SAINIK SCHOOL, MILITARY SCHOOL, RIMC, NAVODAYA SCHOOL

- 82.** Name the plant that brings sleep:
a. Opium Poppy b. Sunflower
c. Neem d. Pine
- 83.** Where was Guru Nanak born:
a. Amritsar b. Ludhiana
c. Jalandhar d. Talwandi
- 84.** Which country is known as home of spice:
a. Sri Lanka b. India
c. Bangladesh d. Malaysia
- 85.** Who made the famous painting Mona Lisa:
a. Edward Munch b. Leonardo da
c. Claude Monet d. Vincent Van Gogh
- 86.** Name the only bird that can fly backwards:
a. Humming Bird b. Pigeon
c. Crow d. Sparrow
- 87.** What is an EVM:
a. Electric Voter Machine
b. Electronic Voting Machine
c. Electric Voting Machine
d. Electronic Voting Manual
- 88.** "Life Good" is associated with which brand:
a. Tata b. LG
c. Sony d. Videocon
- 89.** Who invented the Television:
a. Phillips b. Waterman
c. J L Baird d. Benjamin
- 90.** What is the meaning of the word 'Yoga' that is derived from Sanskrit:
a. Mediation b. Union
c. Twist d. Relax
- 91.** In which city Jama Masjid is located
a. Delhi b. Hyderabad
c. Ahmedabad d. Jaipur
- 92.** Whose slogan is 'Freedom from hunger for every human in the world':
a. UNESCO b. ILO
c. WHO d. FAO
- 93.** The periodic rise and fall in the water level in the ocean is called:
a. Cyclone b. Tsunami
c. Hurricane d. Tide
- 94.** Which is the venue of 2020 Olympics?
a. Santiago b. Buenos Aires
c. Rio de Janeiro d. Tokyo
- 95.** Golden revolution refer to:
a. Sericulture b. Horticulture
c. Milk production d. Egg production
- 96.** Who has the first Indian born basketball player to get selected in National Basketball Association (NBA)
a. Satnam Singh b. Balbir Chauhan
c. Balbir Singh d. Ramesh Rathode
- 97.** Who won the Common wealth chess championship title 2015?
a. Arghyadip Das b. Abhijeet Gupta
c. Lalith Babu d. Mukund Pal
- 98.** Which of the following is a renewable energy resource?
a. Coal b. Wind
c. Gasoline d. Oil
- 99.** What is the capital of Kosovo?
a. Pristina b. Nairobi
c. Pyongyang d. Bishkek
- 100.** What is PARAM?
a. Computer b. Dance
c. Language d. Phone

GENERAL INTELLIGENCE (REASONING)

Direction (101-107) c

- 101.** Optimist: Cheerful:: Pessimist: ?
a. Petty b. Selfish

AMMISSION HELP LINE NO. 0171-4000403, 9306989629, 9729199040 (AMBALA)
AMMISSION HELP LINE NO. 0176-2515447, 7087907020, 9780775512 (ZIRAKPUR)
AMMISSION HELP LINE NO. 8059460405, 7837148861, 9729526464 (DOSARKA)

CAREER INFOWIS INSTITUTE

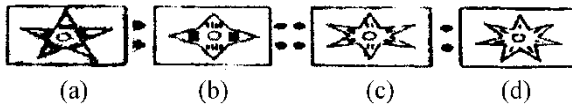
SAINIK SCHOOL, MILITARY SCHOOL, RIMC, NAVODAYA SCHOOL

- | | |
|---|--|
| <p>c. Glommy d. Mean</p> <p>102. 8: 9:: 64: ?</p> <p>a. 8/9 b. 4</p> <p>c. 65 d. 72</p> <p>103. 720: 840:: 60: ?</p> <p>a. 76 b. 80</p> <p>c. 70 d. 74</p> <p>104. YTOJ: XSNI:: WRMH: ?</p> <p>a. VQLG b. TOJE</p> <p>c. RMHC d. UPKF</p> <p>105. SOCIAL: OCIALS:: DRIVEN: ?</p> <p>a. VERNID b. NEVIRD</p> <p>c. RIVEND d. VIREND</p> <p>106. K/T: 11/12:: J/R: ?</p> <p>a. 10/18 b. 11/19</p> <p>c. 10/8 d. 5/10</p> <p>107. Man: Biography:: Nation: ?</p> <p>a. History b. Geography</p> <p>c. People d. Leader</p> <p>Direction (108-110): Select the one which is direction from other alternatives:</p> <p>108. a. 9-72 b. 8-6</p> <p>c. 11-115 d. 10-90</p> <p>109. a. Bay b. Plateau</p> <p>c. Island d. Peninsula</p> <p>110. a. 2012 b. 1998</p> <p>c. 2005 d. 1997</p> <p>Direction (111-120): Complete the series:</p> <p>111. ELFA, GLHA, ILJA, ____, MLNA.</p> <p>a. OLPA b. KLMA</p> <p>c. LLMA d. KLLA</p> <p>112. 1, 5, 25, 125, ____, ____, ____.</p> <p>a. 245, 485, 965 b. 225, 325, 425</p> <p>c. 625, 3225, 15605 d. 625, 3125, 15625</p> <p>113. 589654237, 89654237, 8965423, 965423, ?</p> <p>a. 58965 b. 65423</p> | <p>c. 89654 d. 96542</p> <p>114. 36, 34, 30, 28, 24, ____</p> <p>a. 24 b. 22</p> <p>c. 23 d. 26</p> <p>115. 1, 1, 2, 3, ____, 8, 13, 21, 34, 55</p> <p>a. 3 b. 4</p> <p>c. 5 d. 6</p> <p>116. 2, 5, 10, ____, 26, 37, 50, 65, 82</p> <p>a. 18 b. 19</p> <p>c. 16 d. 17</p> <p>117. 3 F, 6 G, 11 I, 18 L, ____</p> <p>a. 21 O b. 25 N</p> <p>c. 27 P d. 27 Q</p> <p>118. 3, 8, ____, 24, 35, 48, 63, 80</p> <p>a. 15 b. 18</p> <p>c. 16 d. 17</p> <p>119. bc_b_c_b_ccb.</p> <p>a. cbc b. bbc</p> <p>c. cbc d. bcb</p> <p>120. a_aca_aca_a_ .</p> <p>a. cac b. bbc</p> <p>c. cab d. abc</p> <p>121. There are five friends-Sachin, Kamal, Mohan, Arun and Ram. Sachin is shorter than Kamal but taller than Ram. Mohan is the tallest. Arun is a little shorter than Kamal and a little taller than Sachin. Who is the second tallest?</p> <p>a. Ram b. Sachin</p> <p>c. Kamal d. Arun</p> <p>122. Pratap starts from school and walks 7 km towards East. He takes a left and walks 4 km, then takes a right and walks 2 km, again takes a right and walks 3 km. Which direction is he facing now?</p> <p>a. South b. North</p> |
|---|--|

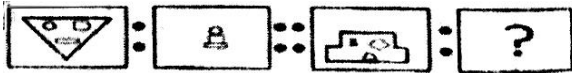
AMMISSION HELP LINE NO. 0171-4000403, 9306989629, 9729199040 (AMBALA)
 AMMISSION HELP LINE NO. 0176-2515447, 7087907020, 9780775512 (ZIRAKPUR)
 AMMISSION HELP LINE NO. 8059460405, 7837148861, 9729526464 (DOSARKA)

CAREER INFOWIS INSTITUTE

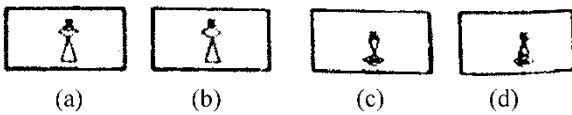
SAINIK SCHOOL, MILITARY SCHOOL, RIMC, NAVODAYA SCHOOL



135.



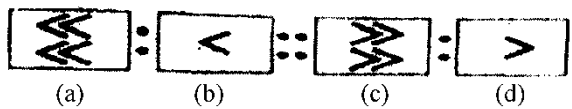
Answer Figures



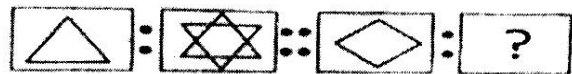
136.



Answer Figures



137.



Answer Figures



Direction (138-140): Three of the following four are alike in a certain way and so form a group. Which is the one that does not belong to that group.

138. a. Yacht b. Submarine
c. Boat d. Ship
139. a. Autobiography b. Malayalam

- c. Intelligence d. Dictionary
140. a. Square b. Trapezium
c. Cylinder d. Parallelogram
141. Shyama says that father of Rajiv's father is my father. How is Shayama related to Rajiv:
a. Sister
b. Mother
c. Aunty (Father's Sister)
d. Niece

Direction (142-145): Find out the figure from the answer figure that will continue the series:

142.

Problem Figures


Answer Figures



143.



144.



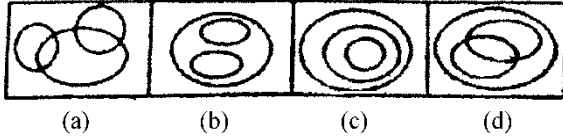
145.



Direction (146-150): identify the diagram that best represents the relationship among the classes given below:

CAREER INFOWIS INSTITUTE

SAINIK SCHOOL, MILITARY SCHOOL, RIMC, NAVODAYA SCHOOL



146. Factory, Machinery, product
 147. Traveller, Train, Bus
 148. Book, Poem, Word
 149. Train, Coach, Seat
 150. Library, Book, Newspaper

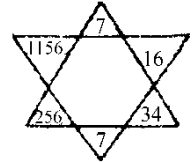
MATHEMATICS

151. The area of a square is 16 cm^2 . Find the Perimeter of the square.
 a. 16 cm b. 32 cm
 c. 8 cm d. 20 cm
152. The population of a village is 4550. It is increasing 20% annually. Find the population after one year.
 a. 5060 b. 5460
 c. 5260 d. 5340
153. If cost of 30 metres of cloth is Rs. 345. What is the cost of 16 metres of cloth?
 a. Rs. 184 b. Rs. 274
 c. Rs. 164 d. Rs. 204
154. If one truck loads 60 crates of apples then how many trucks will be required 4200 crates of apples:
 a. 75 b. 70
 c. 65 d. 80
155. The difference of 125.6321 and 27.54 is:
 a. 90.0921 b. 95.3
 c. 98.0921 d. 100
156. The perimeter of a rectangle is 240 m and the ratio of length and breadth is 5: 3. Find the area of the rectangle?

- a. 1250 sq. m b. 3375 sq. m
 c. 2825 sq. m d. 3615 sq. m

157. Find the value of '?' from the figure

- a. 72
 b. 66
 c. 68
 d. 49



158. How many whole numbers are smaller than 9.

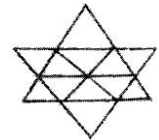
- a. 1 b. 0
 c. 8 d. 9

159. One km is how many centimeters:

- a. 100000 b. 10000
 c. 1000 d. 100

160. Find the number of triangles in the following figure:

- a. 20
 b. 25
 c. 18
 d. 15



161. Calculate the size of angle y in the adjoining figure.

- a. 27
 b. 43
 c. 23
 d. 15



162. The HCF and LCM of two numbers are 18 and 252 respectively. If one of the numbers is 126, find the other:

- a. 12 b. 18
 c. 36 d. 15

163. What is the smallest three-digit number completely divisible by 12, 18 and 24:

- a. 72 b. 144
 c. 180 d. 224

AMMISSION HELP LINE NO. 0171-4000403, 9306989629, 9729199040 (AMBALA)
 AMMISSION HELP LINE NO. 0176-2515447, 7087907020, 9780775512 (ZIRAKPUR)
 AMMISSION HELP LINE NO. 8059460405, 7837148861, 9729526464 (DOSARKA)

CAREER INFOWIS INSTITUTE

SAINIK SCHOOL, MILITARY SCHOOL, RIMC, NAVODAYA SCHOOL

- 164.** Find $37\frac{1}{2}\%$ of Rs. 48.
- a. Rs. 15 b. Rs. 14
c. Rs. 22 d. Rs. 18
- 165.** A's income is 40% of $\frac{2}{5}$ of B's income. If B's income is Rs. 4000, find the income:
- a. Rs. 640 b. Rs. 560
c. Rs. 486 d. Rs. 800
- 166.** After what time will the sum of Rs. 2000 become Rs. 2240 at 4% per annum simple interest:
- a. 5 years b. 4 years
c. 3 years d. 2 years
- 167.** Find the area of a rectangular field which is 50 m long and 25 m wide:
- a. 1150 sq. m b. 1250 sq. m
c. 1275 sq. m d. 1280 sq. m
- 168.** The product of two numbers is 3333. If one of them is 11. Find the other:
- a. 33 b. 333
c. 303 d. 330
- 169.** Express 12 m/min in km/hr.
- a. 0.72 km/hr. b. 72 km/hr.
c. 7.2 km/hr. d. 0.072 km/hr.
- 170.** Three angles of a triangle are in the ratio 1: 2: 3. What is the value of the greatest angle:
- a. 105 b. 120
c. 90 d. 80
- 171.** What is the complimentary angle of 60°
- a. 30° b. 120°
c. 300° d. 90°
- 172.** What is the place value of 5 in 678.675:
- a. $\frac{5}{1000}$ b. $\frac{5}{10}$
c. 50 d. $\frac{5}{100}$
- 173.** What should be subtracted from 1 to get $\frac{7}{10}$
- :
- a. $\frac{1}{10}$ b. $\frac{2}{10}$
c. $\frac{5}{10}$ d. $\frac{3}{10}$
- 174.** Subtract (-4) from (-10) :
- a. -6 b. 6
c. 4 d. -4
- 175.** How many seconds are there in 5 hours:
- a. 18000 b. 18500
c. 1800 d. 20000
- 176.** What is the value of $\frac{0.001}{0.01}$:
- a. 0.01 b. 0.001
c. 0.011 d. 0.1
- 177.** What is the value of $12.32 \div 2.2$:
- a. 5.8 b. 5.1
c. 5.4 d. 5.6
- 178.** Make the smallest four-digit member, using digits 0, 1, 2, 3 without repetition:
- a. 0.123 b. 1023
c. 1230 d. 1032
- 179.** If 75% of a number is 15. Then find the number:
- a. 20 b. 25
c. 40 d. 35

CAREER INFOWIS INSTITUTE

SAINIK SCHOOL, MILITARY SCHOOL, RIMC, NAVODAYA SCHOOL

- 180.** An isosceles triangle has two sides with length x . The third side is half of x . Find its perimeter.
- a. $2\frac{1}{2}x$ b. $5x$
- c. $3x$ d. $4\frac{1}{2}x$
- 181.** What is the difference between the third power of 2 and the second power of 3?
- a. 2 b. 5
- c. 3 d. 1
- 182.** Simplify: $3720 + 30 - 3 \times 36 + \frac{480}{24}$
- a. 3674 b. 3652
- c. 3640 d. 3642
- 183.** The sum of two numbers is 40 and their difference is 4. Find the ratio of these two numbers?
- a. 10: 9 b. 11: 9
- c. 13: 9 d. 8: 9
- 184.** Simplify: $(16/4)/4$
- a. 4 b. 3
- c. 2 d. 1
- 185.** Manoj eats 8 bananas in the morning, 5 in the afternoon and 2 in the evening. How many dozens of bananas does he eat in day?
- a. $1\frac{1}{4}$ b. $\frac{1}{4}$
- c. $\frac{3}{13}$ d. $14\frac{17}{30}$
- 186.** The base and height of a triangle is 8 cm and 10 cm respectively. Find its area:
- a. 40 sq. cm b. 20 sq. cm
- c. 49 sq. cm d. 64 sq. cm
- 187.** A train travels from A to B at the rate of 20 km per hour and from B to A at the rate of 30 km/hr. What is the average speed for the whole journey?
- a. 20 km/hr. b. 25 km/hr.
- c. 24 km/hr. d. 28 km/hr.
- 188.** Find the cube root of $729 a^9 b^6$:
- a. $9a^3 b$ b. $9a^2 b^3$
- c. $9a^3 b^2$ d. $9a^3 b^3$
- 189.** A batch of bottles was packed in 25 boxes with 12 bottles in each box. If the same batch is packed using 20 bottles in each box, how many boxes would be filled:
- a. 12 b. 15
- c. 18 d. 20
- 190.** A bag of chocolates can be shared equally among 4, 5, 6 children with no leftover. What is the least number of chocolates in the bag?
- a. 40 b. 50
- c. 60 d. 80
- 191.** How many lines can pass through two given points:
- a. 1 b. 2
- c. 3 d. Infinite
- 192.** Which of the following numbers do you get if you subtract -40 from -50 :
- a. 10 b. -10
- c. -90 d. 90
- 193.** Find the supplementary angle of 55° :
- a. 35° b. 65°
- c. 40° d. 125°
- 194.** Express 0.045 as percentage:
- a. 4.5% b. 5%
- c. 0.45% d. 0.045%

AMMISSION HELP LINE NO. 0171-4000403, 9306989629, 9729199040 (AMBALA)
 AMMISSION HELP LINE NO. 0176-2515447, 7087907020, 9780775512 (ZIRAKPUR)
 AMMISSION HELP LINE NO. 8059460405, 7837148861, 9729526464 (DOSARKA)

CAREER INFOWIS INSTITUTE

SAINIK SCHOOL, MILITARY SCHOOL, RIMC, NAVODAYA SCHOOL

195. If one dozen books costs Rs. 252 find the cost of 10 notebooks:

- a. 210 b. 200
c. 189 d. 168

196. Find the greatest fraction: $\frac{2}{5}, \frac{5}{6}, \frac{11}{12}, \frac{7}{8}$

- a. $\frac{7}{8}$ b. $\frac{11}{12}$
c. $\frac{5}{6}$ d. $\frac{2}{5}$

197. How many $\frac{1}{8}$ are there in 37.5:

- a. 300 b. 400
c. 500 d. 375

198. Find 25% of 25%.

- a. 0.625
b. 625
c. 0.0625
d. 0.00625

199. Find HCF of: 1134, 1344, 1638 is:

- a. 21 b. 42
c. 63 d. 7

200. Find the value of $(3745 \times 65 + 3745 \times 35)$

- a. 757900
b. 579700
c. 374500
d. 734500

CAREER INFOWIS INSTITUTE

SAINIK SCHOOL, MILITARY SCHOOL, RIMC, NAVODAYA SCHOOL

ANSWER KEY

<u>Language Test (English)</u>									
1. C	6. C	11. C	16. C	21. C	26. A	31. C	36. C	41. C	46. A
2. D	7. A	12. A	17. B	22. B	27. B	32. D	37. C	42. B	47. C
3. B	8. B	13. D	18. A	23. A	28. C	33. D	38. B	43. C	48. B
4. A	9. A	14. D	19. B	24. D	29. D	34. C	39. B	44. A	49. A
5. A	10. C	15. A	20. B	25. C	30. D	35. C	40. D	45. B	50. A
<u>General Knowledge</u>									
51. B	56. B	61. C	66. B	71. C	76. C	81. B	86. A	91. A	96. A
52. C	57. C	62. D	67. D	72. B	77. C	82. D	87. B	92. D	97. B
53. A	58. C	63. C	68. B	73. A	78. B	83. D	88. B	93. D	98. A
54. C	59. B	64. C	69. A	74. C	79. D	84. B	89. C	94. D	99. A
55. B	60. B	65. B	70. A	75. B	80. C	85. B	90. B	95. B	100. A
<u>General Intelligence (Reasoning)</u>									
101. C	106. A	111. D	116. D	121. C	126. B	131. B	136. C	141. A	146. C
102. D	107. B	112. D	117. C	122. A	127. A	132. A	137. C	142. C	147. B
103. C	108. C	113. B	118. A	123. B	128. C	133. C	138. B	143. D	148. C
104. A	109. A	114. B	119. C	124. B	129. C	134. B	139. D	144. A	149. C
105. C	110. A	115. A	120. B	125. B	130. A	135. B	140. C	145. B	150. B
<u>Mathematics</u>									
151. A	156. B	161. C	166. C	171. A	176. D	181. D	186. A	191. A	196. B
152. B	157. D	162. C	167. B	172. B	177. D	182. A	187. C	192. B	197. B
153. A	158. D	163. A	168. C	173. D	178. B	183. B	188. C	193. D	198. C
154. B	159. A	164. D	169. A	174. A	179. A	184. D	189. C	194. A	199. B
155. C	160. A	165. A	170. C	175. A	180. D	185. C	190. C	195. A	200. C

AMMISSION HELP LINE NO. 0171-4000403, 9306989629, 9729199040 (AMBALA)
 AMMISSION HELP LINE NO. 0176-2515447, 7087907020, 9780775512 (ZIRAKPUR)
 AMMISSION HELP LINE NO. 8059460405, 7837148861, 9729526464 (DOSARKA)