

SAMPLE PAPER 5

LANGUAGE TEST (ENGLISH)

Direction (1-5): Choose the word opposite in meaning to the given word and mark it in the answer sheet.

1. Fortify:
a. Strengthen b. Support
c. Undermine d. Intensify
2. Misanthropist:
a. Philanthropist b. Zealot
c. Pragmatist d. Pedant
3. Unapproachable:
a. Unclear b. Accessible
c. Casual d. Withdrawn
4. Ostracize:
a. Crucify b. Discard
c. Patronize d. Shun
5. Abstain:
a. Repel b. Indulge
c. Disgrace d. Dismiss

Direction (6-10): Four words are given in each question, out of which only one word is correctly spelt. Find the correctly spelt word and mark your answer in the answer sheet.

6. Find the correctly spelt word.
a. Conteinment b. Confinment
c. Conceilment d. Consignment
7. Find the correctly spelt word.
a. Obeisence b. Perservance
c. Turbulance d. Surveillance
8. Find the correctly spelt word.
a. Congruous b. Auspicious
c. Audacious d. Hillarious
9. Find the correctly spelt word.
a. Dysfunction b. Dastitution
c. Divienation d. Divarsion
10. Find the correctly spelt word.
a. Hygeinic b. Hygienic
c. Hyigeinic d. Hyegienic

Direction (11-15): A sentence/a part of the sentence are underlined. Below are given alternatives to the underlined part which may improve the sentence. Choose the correct alternative. In case no improvement is required, choose "No Improvement" option.

11. Try to lower the amount of fat in your diet
a. Lose b. No improvement
c. Cut d. Reduce
12. You should cut off on the amount of cigarettes you smoke
a. cut out b. cut down
c. No improvement d. cut up
13. You must accustom yourself with new ideas
a. No improvement
b. accustomed yourself with
c. get accustom to
d. accustoms yourself to
14. I contradicted against him
a. No improvement b. contradicted with
c. contradicted d. contradicted over
15. No sooner than it stopped raining, the children went out
a. No improvement
b. had it stopped raining than
c. did it stopped raining than
d. did it stop raining than

Direction (16-20): Out of the four alternatives, choose the one which best expresses the meaning of the given word and mark it in the answer sheet.

16. Synopsis:
a. Preview b. Discussion
c. Summary d. Report
17. Contentious:
a. Extravagant b. Precious
c. Benevolent d. Controversial
18. Conjecture:
a. Strife b. Guess

- c. P. Chidambaram d. Medha Patkar/(Megha Patekar)
36. Who amongst the following has not been inducted as member of the newly constituted cricket advisory committee of BCCI on June 1, 2015:
a. Rahul Dravid b. Sachin Tendulkar
c. Sourav Ganguly d. V.V.S. Laxman
37. Which are the three 'SAARC' countries with whom India has signed a motor vehicle agreement on June 15, 2015:
a. Bangladesh, Sri Lanka, Maldives
b. Bangladesh, Nepal, Bhutan
c. Paksitan, Bangladesh, Sri Lanka
d. Nepal, Sri Lanka, Maldives
38. In the second quarter of 2015, the Indian Government in principle has decided to set-up how many new 'nuclear power projects' in the country:
a. 7 b. 8
c. 9 d. 10
39. Which country amongst the following decided in May 2015 to lift ban on import of rice from India:
a. Iran b. China
c. Brazil d. U.S.A.
40. Which State/Union Territory decided in May 2015 not to allow foreign direct investment in retail market:
a. Haryana b. Delhi
c. Mizoram d. Kerala
41. At what rank World Economic Forum report has placed India on 'Human Capital Index' in May 2015:
a. 128th b. 120th
c. 108th d. 100th
42. On May 25, 2015 who amongst the following was declared as 'International Batsman of the Year' in CEAT Awards:
a. Ajinkya Rahane b. Hashim Arnal
c. Kumar Sangakara d. Rangana Herath
43. Dr. Suniti Solomon, who passed away recently, was associated with which field:
a. Film b. Medical
c. Music d. Literature
44. Which among the following is India's largest e-commerce company:
a. Flipkart b. Jabong
c. m-junction d. Bharti Airtel
45. The State which ranks next to Kerala in terms of female literacy in India according to Census 2011 is
a. Mizoram b. Tripura
c. Goa d. Meghalaya
46. Which State of India has launched the Village Monitoring Project to uplift villages:
a. Maharashtra b. Kerala
c. Gujarat d. Haryana
47. Who among the following has been recently appointed as Executive-Director of RBI:
a. Reena Hemchanda
b. Leena Hemchanda
c. Meena Hemchanda
d. Heena Hemchanda
48. Which State of India has recently decided to start 'She-Bus' programme:
a. Tamil Nadu b. Karnataka
c. Kerala d. Andhra Pradesh
49. Which one of the following countries is the largest producer of steel in the world:
a. U.S.A. b. West Germany
c. China d. India
50. 'NITI-Aayog' has been constituted under which Article of the Constitution of India:
a. Article-280 b. Article-282
c. Article-286 d. None of the above

CAREER INFOWIS INSTITUTE

SAINIK SCHOOL, MILITARY SCHOOL, RIMC, NAVODAYA SCHOOL

- 83.** Jatin reads a 200-page book in 10 hours. How many hours he will take to read a 320 page book:
a. 16 hrs. b. 24 hrs.
c. 18 hrs. d. 32 hrs.
- 84.** In what time will a 270 m long train cross 180 m long bridge at the speed of 108 kmph:
a. 3 sec b. 6 sec
c. 9 sec d. 15 sec
- 85.** The average of first 50 natural numbers is
a. 25.30 b. 25.5
c. 25.00 d. 12.25
- 86.** A 270 m long train is running at the speed of 25 kmph. In what time will it cross a man coming from the opposite direction at the speed of 2 kmph:
a. 36 sec. b. 32 sec.
c. 28 sec. d. 24 sec.
- 87.** If the rate of dividend is 5%, find the income by purchasing 20 shares of Rs. 50 each.
a. Rs. 60 b. Rs. 50
c. Rs. 40 d. Rs. 30
- 88.** If 10% of a number is subtracted from it, the result is 1800. The number is
a. 1900 b. 2000
c. 2100 d. 2140
- 89.** Two pipes can fill a tank in 10 minutes and 30 minutes respectively and third pipe can empty the full tank in 20 mins. If all the three pipes are opened simultaneously, the tank will be filled in
a. 10 mins. b. 8 mins.
c. 7 mins. d. None of these
- 90.** A, B and C together earn Rs. 1100. A and B together get $\frac{7}{11}$ th of the sum. C's share is
a. Rs. 700 b. Rs. 400
c. Rs. 300 d. Rs. 500
- 91.** $138.009 + 341.981 - 146.305 = 123.6 + ?$
a. 120.085 b. 120.85
c. 220.085 d. None of these
- 92.** A man bought a radio for Rs. 800 and spent Rs. 400 on it. He sold it for Rs. 1500. His gain per cent is
a. 55% b. 35%
c. 25% d. 53%
- 93.** A man sells 320 mangoes at the cost price of 400 mangoes. His profit percent is:
a. 10% b. 15%
c. 20% d. 25%
- 94.** The least perfect square number which is divisible by 3, 4, 5, 6 and 8 is
a. 900 b. 1600
c. 2500 d. 3600
- 95.** At What sum the simple interest will be Rs. 500 at the rate of 5% per annum in 4 years:
a. Rs. 2500 b. Rs. 2000
c. Rs. 1500 d. Rs. 3000
- 96.** A wheel makes 1000 revolutions in covering a distance of 88 kms. The radius of the wheel is
a. 7 m b. 14 m
c. 20 m d. 12 m
- 97.** At what rate percent per annum a sum of Rs. 1,800 will become Rs. 2,700 in 10 years
a. 5% b. 6%
c. 6.75% d. 7.5%
- 98.** Find the odd man out
a. 32:15 b. 86:42
c. 56:26 d. 74:36
- 99.** The cost of a sewing machine is 1391 with 7% sales tax. If the sales tax will increase by 10%, then what will the sales price of the sewing machine:
a. Rs. 1460 b. Rs. 1430
c. Rs. 1480 d. Rs. 1490
- 100.** From the top of a cliff 90 m high, the angles of depression of the top and bottom of a tower are observed to be 30° and 60° respectively. What is the height of the tower?
a. 45 m b. 60 m

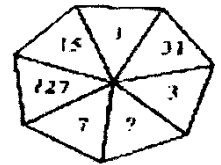
- c. 75 m d. 30 m

GENERAL INTELLIGENCE (REASONING)

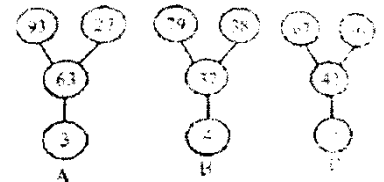
- 101.** What number should replace the question mark: 163, 524, 949, 1898, ?
a. 10878 b. 10899
c. 10879 d. 12879
- 102.** 14, 12, 21, ?, 28, 24, 35, 30
a. 16 b. 18
c. 20 d. 22
- 103.** Which alphabet comes immediately before the sixth alphabet from the right extreme of the given alphabets:
a. E b. F
c. G d. U
- 104.** Find which one word cannot be made from the letters of the given word: CREDENTIAL
a. DENTAL b. CREATE
c. TRAIN d. CREAM
- 105.** a. Broad: Wide b. Light: Heavy
c. Tiny: Small d. Big: Large
- 106.** One of the numbers does not belong to the group. Find the number: 87, 116, 145, 173, 203
a. 87 b. 116
c. 145 d. 173
- 107.** As COUNSEL is to BITIRAK, so also GUIDANCE is to
a. EOHYZKBB b. FOHYZJBB
c. FPHZZKAB d. HOHYBJBA
- 108.** Fill the blank from the choice given below:
322120: 321920:: 324342: ?
a. 324142 b. 324132
c. 323143 d. 323319
- 109.** If D = 4 and cover = 63, then BASIS = ?
a. 49 b. 50
c. 54 d. 55
- 110.** If W-O-R-K is coded like 4-12-9-18, then how will you code the following: B-A-N-K
a. 7-1-13-4-5-14 b. 20-25-5-21-22-13

- c. 20-26-9-23-22-13 d. None


- 111.** If it was Saturday on 17th December 2002, what was the day on 22nd December 2004:
a. Monday b. Tuesday
c. Wednesday d. Sunday
- 112.** Find the exact time between 7 am and 8 am when the two hands of a watch meet:
a. 7 hr. 35 min
b. 7 hr. 36.99 min
c. 7 hr. 38.18 min
d. 7 hr. 42.6 min



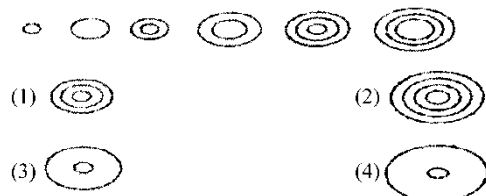
- 113.** What number should replace the question mark:
a. 64 b. 63
c. 72 d. 78
- 114.** What number should replace the question mark:
a. 5
b. 6
c. 8
d. 9



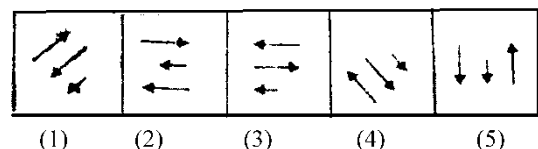
- 115.** What comes next in the sequence:



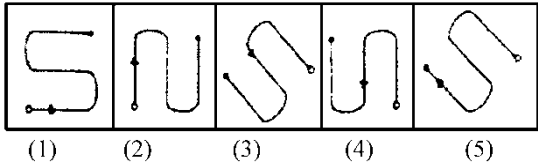
- 116.** What comes next in the sequence:



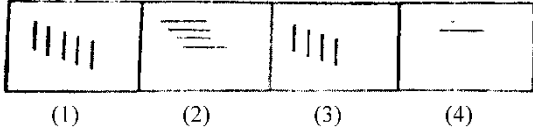
- 117.** Problem figure



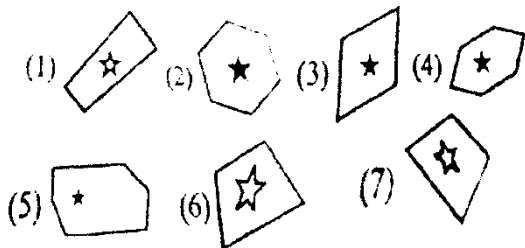
- 118.** Problem figure



119. Problem figure

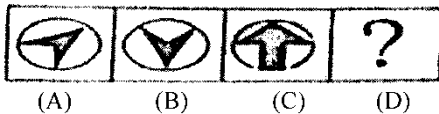


120. Which is the odd one out:



Direction (121-123): Figure A and B are related in a particular manner. Establish the same relationship between figures C and D by choosing a figure from amongst the five alternatives which would replace the question mark in fig (D)

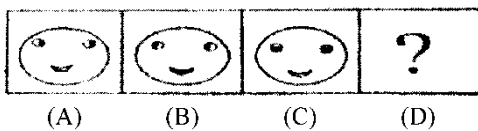
121.



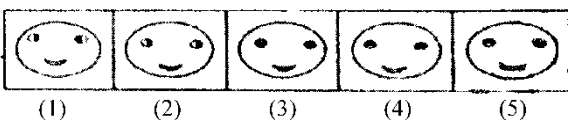
Answer Figures



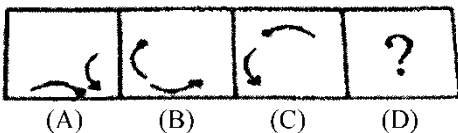
122.



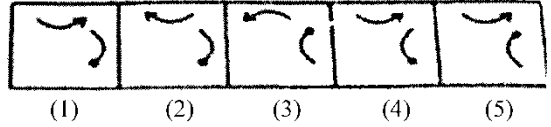
Answer Figures



123.

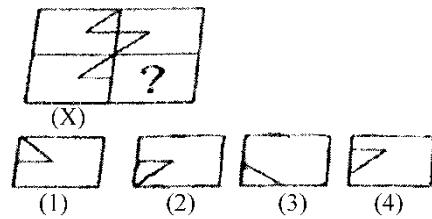


Answer Figures

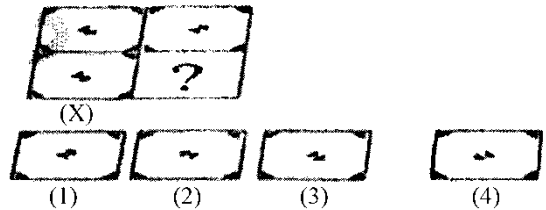


Direction (124-125): Replace the Question mark with the options:

124.



125.



CAREER INFOWIS INSTITUTE

SAINIK SCHOOL, MILITARY SCHOOL, RIMC, NAVODAYA SCHOOL

ANSWER KEY

Language Test (English)

1. C	4. C	7. D	10. B	13. D	16. C	19. A	22. D	25. D
2. A	5. B	8. C	11. D	14. C	17. D	20. A	23. B	
3. B	6. D	9. A	12. B	15. D	18. B	21. B	24. B	

General Knowledge

26. D	29. D	32. B	35. A	38. D	41. D	44. C	47. C	50. D
27. B	30. B	33. B	36. A	39. A	42. B	45. A	48. C	
28. B	31. C	34. C	37. B	40. B	43. B	46. D	49. C	

Mathematics

51. B	56. D	61. A	66. D	71. D	76. B	81. B	86. C	91. A	96. A
52. B	57. A	62. B	67. C	72. C	77. D	82. A	87. B	92. B	97. C
53. B	58. A	63. D	68. B	73. C	78. D	83. A	88. B	93. B	98. B
54. B	59. A	64. A	69. B	74. B	79. A	84. B	89. A	94. A	99. B
55. C	60. C	65. D	70. B	75. D	80. C	85. A	90. C	95. B	100. B

General Intelligence (Reasoning)

101. C	104. D	107. B	110. C	113. B	116. B	119. A	122. D	125. A
102. B	105. B	108. A	111. C	114. D	117. C	120. C	123. D	
103. A	106. D	109. B	112. C	115. C	118. B	121. D	124. B	